

# Jungle and Rainforest I Spy and Add to 10 **Answers**

Count the number of each type of jungle and rainforest pictures needed in the addition number sentence. Write the numbers in the boxes to create and solve an addition number sentence.



2


+



3


=

5



2

+



5

=

7



4


+



5

=

9



2


+



7


=

9



6

+



4

=

10