


Make equal groups – grouping



1 Annie has 10 apples.



Annie has some plates.

She wants to put 2 apples on each plate.

Show how Annie groups the apples.

Complete the sentences.

There are apples.

There are apples on each plate.

There are plates.

2 Take 15 counters.



Put the counters into groups of 3

Complete the sentences.

There are 15 counters.

The counters are in groups of

There are groups.

3 Mo has 20 chairs.

a) Circle groups of 5 chairs.



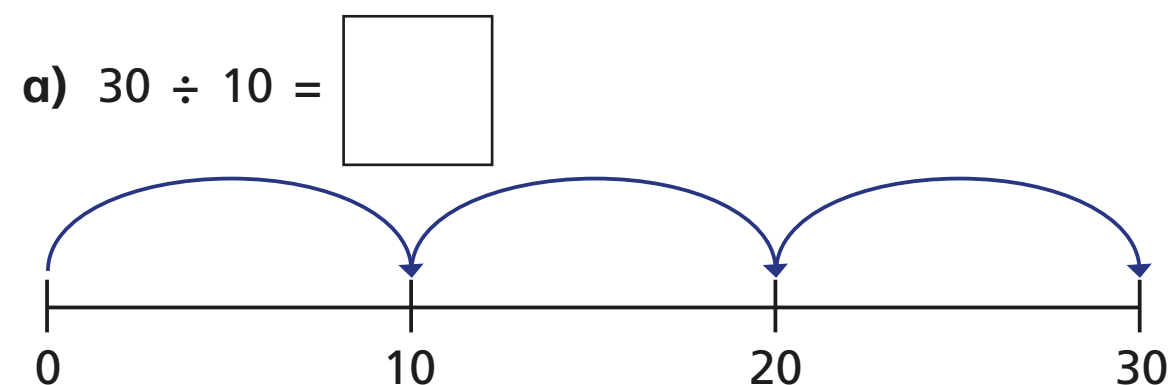
b) How many groups did you circle?

c) Complete the number sentence.

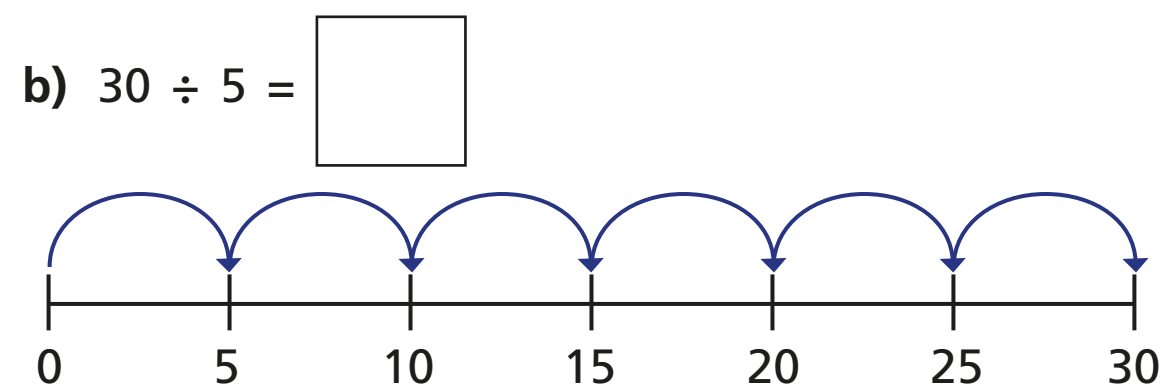
$$\boxed{} \div \boxed{} = \boxed{}$$



- 4 Complete the number sentences.
Use the number line to help you.

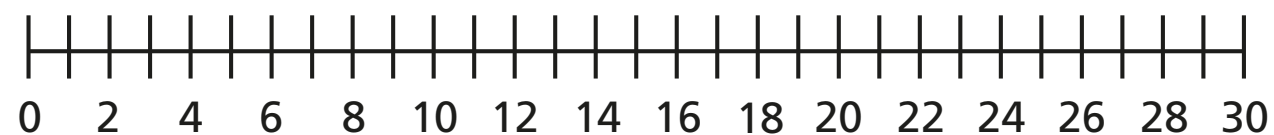


30 is made of equal groups of




30 is made of equal groups of

- c) Investigate other equal groups you could make with 30



Talk about it with a partner.

- 5 Eva is putting 24 pencils into pots.




She puts 2 pencils into each pot.
How many pots does Eva need?

$$\boxed{} \div \boxed{} = \boxed{}$$

Eva needs pots.

- 6

With 40 counters
you can only make equal
groups of 4 and 10



Is Ron correct? _____

Use counters to show how you know.

