

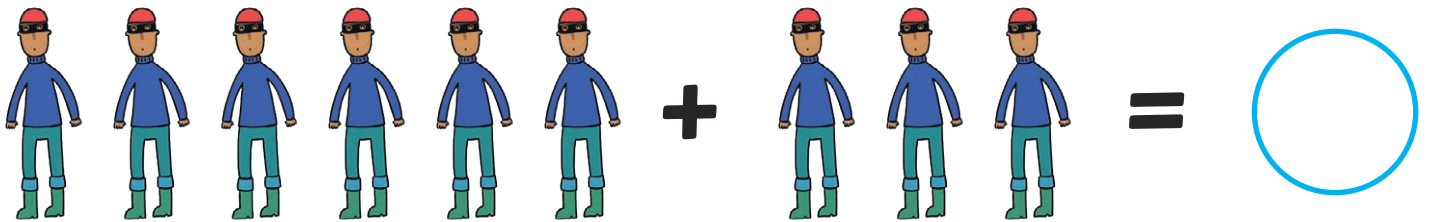



Addition to 10

Write down the answers in the circles.



Addition to 10

Write down the answers in the circles.

$$2 + \begin{array}{c} \text{cat} \quad \text{cat} \end{array} = \bigcirc$$

$$3 + \begin{array}{c} \text{sheep} \end{array} = \bigcirc$$

$$5 + \begin{array}{c} \text{worker} \quad \text{worker} \quad \text{worker} \quad \text{worker} \end{array} = \bigcirc$$

$$8 + \begin{array}{c} \text{ladybug} \end{array} = \bigcirc$$

$$4 + \begin{array}{c} \text{horse} \quad \text{horse} \quad \text{horse} \\ \text{horse} \quad \text{horse} \quad \text{horse} \end{array} = \bigcirc$$

Addition to 10

Write down the answers in the circles.

$$1 + \begin{array}{c} \text{cat} \quad \text{cat} \quad \text{cat} \end{array} + 2 = \bigcirc$$

$$7 + 2 + \bigcirc = 10$$

$$\bigcirc + \begin{array}{c} \text{person} \quad \text{person} \quad \text{person} \quad \text{person} \quad \text{person} \end{array} = 7$$

$$\begin{array}{c} \text{ladybug} \quad \text{ladybug} \\ \text{ladybug} \quad \text{ladybug} \end{array} + \bigcirc + \begin{array}{c} \text{ladybug} \quad \text{ladybug} \\ \text{ladybug} \quad \text{ladybug} \end{array} = 8$$

$$4 + \begin{array}{c} \text{horse} \quad \text{horse} \\ \text{horse} \quad \text{horse} \end{array} + \text{horse} = \bigcirc$$