


# Find the Numbers 1 Less Than and 1 More Than



# What Is 1 Less Than 1?

13

0

12



15

1

8

7

10



# What Is 1 More Than 1?

13

0

11



1

2

10

6

5



# What Is 1 Less Than 2?

9

0

12


11

5

18

1

3



# What Is 1 More Than 2?

19

0

4


11

15

8

1

3



# What Is 1 Less Than 3?

9

10

6


2

3

18

1

14



# What Is 1 More Than 3?

19

8

11

3

2

4

13

14



# What Is 1 Less Than 4?

16

19

3

11

5

13

1

2





# What Is 1 More Than 4?

3

9

7

14

11

5

13

2



# What Is 1 Less Than 5?

9

3

14



4

15

6

1

12



# What Is More 1 Than 5?

9

4

14


3

6

16

1

12



# What Is Less 1 Than 6?

7

14

5


13

9

12

1

6



# What Is More 1 Than 6?

12

3

5

16

5

17

1

7



# What Is 1 Less Than 7?

12

6

5


8

4

18

11

17



# What Is 1 More Than 7?

12

19

7


3

8

14

11

6



# What Is 1 Less Than 8?

9

17

7


10

8

14

6

15





# What Is 1 More Than 8?

11

6

4


15

8

18

9

7



# What Is 1 Less Than 9?

6

12

10



8

4

18

7

17



# What Is 1 More Than 9?

8

14

16

17

5

10

7

9

