

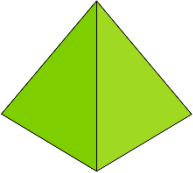







**LO: To describe properties of 3D shapes**

|   |  |
|---|--|
|    | This shape has:<br><br>_____ <b>Faces</b><br><br>_____ <b>Edges</b><br><br>_____ <b>Vertices</b> |
|    | This shape has:<br><br>_____ <b>Faces</b><br><br>_____ <b>Edges</b><br><br>_____ <b>Vertices</b> |
|   | This shape has:<br><br>_____ <b>Faces</b><br><br>_____ <b>Edges</b><br><br>_____ <b>Vertices</b> |
|  | This shape has:<br><br>_____ <b>Faces</b><br><br>_____ <b>Edges</b><br><br>_____ <b>Vertices</b> |
|  | This shape has:<br><br>_____ <b>Faces</b><br><br>_____ <b>Edges</b><br><br>_____ <b>Vertices</b> |

**How did it go? Choose the correct face for you.**

| Self assessment   |
|---|
|    |