

LO: To be able to name the properties of 2d shapes.


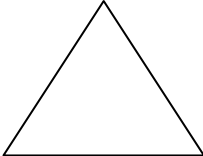


I can count the sides

I can count the corners (vertices).

I know the names of some 2d shapes

2d Shapes

2d shapes are flat, flat, flat! We know that some have corners and all of them have sides, but which is which? Name the shapes below and describe the properties. When you have finished you may colour the shapes.

 Name: _____ Side: _____ Corners: _____	 Name: _____ Side: _____ Corners: _____	 Name: _____ Side: _____ Corners: _____	 Name: _____ Side: _____ Corners: _____
---	--	---	---