

Sharing

Name _____

Share 12 counters into equal amounts.

Into 2 equal amounts:

--	--

$$\underline{\quad} \div \underline{\quad} = \underline{\quad}$$

Into 3 equal amounts:

--	--	--

$$\underline{\quad} \div \underline{\quad} = \underline{\quad}$$




Into 4 equal amounts:

$$\underline{\quad} \div \underline{\quad} = \underline{\quad}$$

Into 6 equal amounts:

$$\underline{\quad} \div \underline{\quad} = \underline{\quad}$$

Now do the same with 24 counters.



Into 2 equal amounts:

--	--

$$\underline{\quad} \div \underline{\quad} = \underline{\quad}$$

Into 3 equal amounts:

--	--	--

$$\underline{\quad} \div \underline{\quad} = \underline{\quad}$$



Into 4 equal amounts:

$$\underline{\quad} \div \underline{\quad} = \underline{\quad}$$

Into 6 equal amounts:

$$\underline{\quad} \div \underline{\quad} = \underline{\quad}$$

Now choose your own numbers to divide.



Into 2 equal amounts:

--	--

$$\underline{\quad} \div \underline{\quad} = \underline{\quad}$$

Into 3 equal amounts:

--	--	--

$$\underline{\quad} \div \underline{\quad} = \underline{\quad}$$

Into 4 equal amounts:

$$\underline{\quad} \div \underline{\quad} = \underline{\quad}$$

Into 6 equal amounts:

$$\underline{\quad} \div \underline{\quad} = \underline{\quad}$$