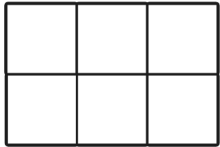


Date \_\_\_\_\_

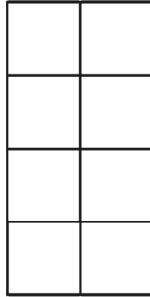
Name \_\_\_\_\_

# Equivalent Fractions $\frac{1}{2}$

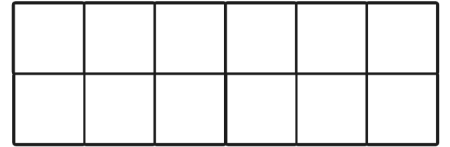
Shade  $\frac{1}{2}$  of each shape. Look at how many squares are shaded (numerator) and the total amount of squares (denominator) and write the equivalent fraction underneath.



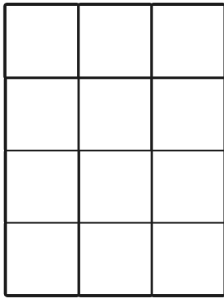
1. \_\_\_\_\_




2. \_\_\_\_\_



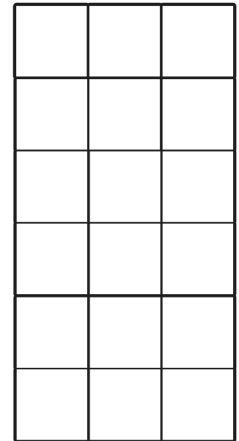
3. \_\_\_\_\_



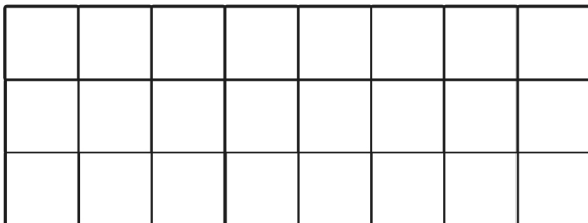
4. \_\_\_\_\_



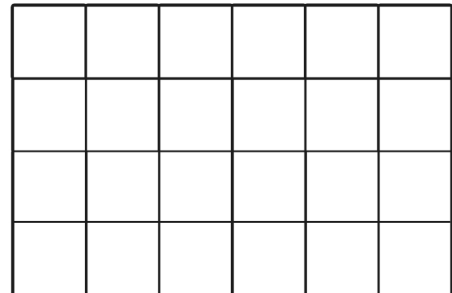
5. \_\_\_\_\_



6. \_\_\_\_\_



7. \_\_\_\_\_



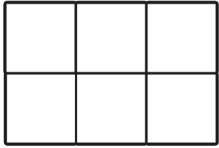
8. \_\_\_\_\_

Date \_\_\_\_\_

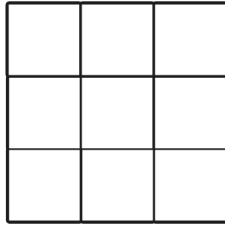
Name \_\_\_\_\_

# Equivalent Fractions $\frac{1}{3}$

Shade  $\frac{1}{3}$  of each shape. Look at how many squares are shaded (numerator) and the total amount of squares (denominator) and write the equivalent fraction underneath.



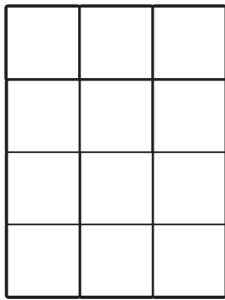
1. \_\_\_\_\_



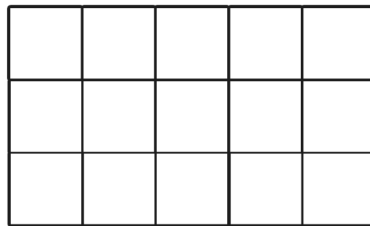
2. \_\_\_\_\_



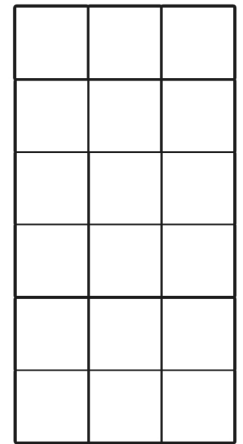
3. \_\_\_\_\_



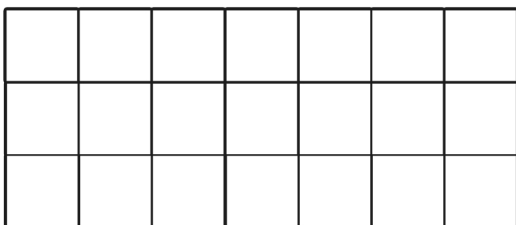
4. \_\_\_\_\_



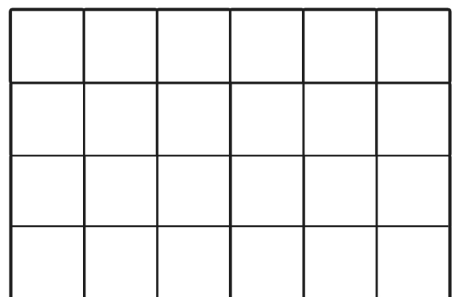
5. \_\_\_\_\_



6. \_\_\_\_\_



7. \_\_\_\_\_



8. \_\_\_\_\_

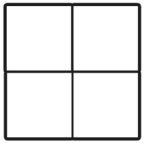
The unshaded squares show  $\frac{2}{3}$ . Write the equivalent fractions:

Date \_\_\_\_\_

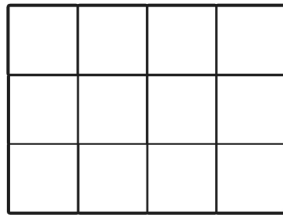
Name \_\_\_\_\_

# Equivalent Fractions $\frac{1}{4}$

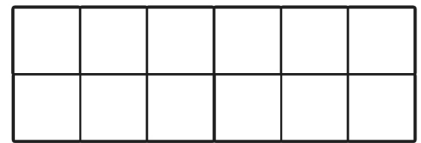
Shade  $\frac{1}{4}$  of each shape. Look at how many squares are shaded (numerator) and the total amount of squares (denominator) and write the equivalent fraction underneath.



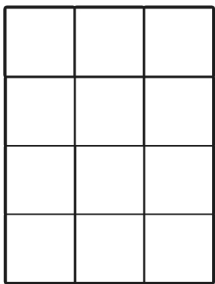
1. \_\_\_\_\_



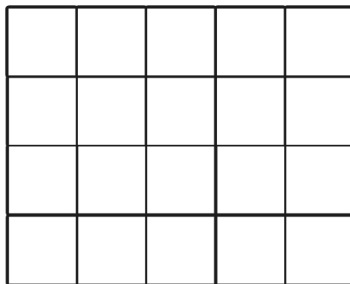
2. \_\_\_\_\_



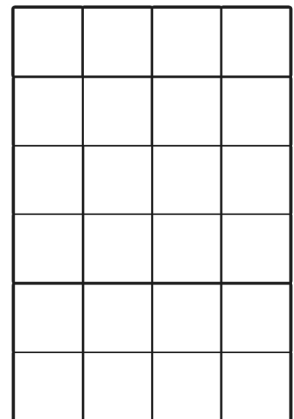
3. \_\_\_\_\_



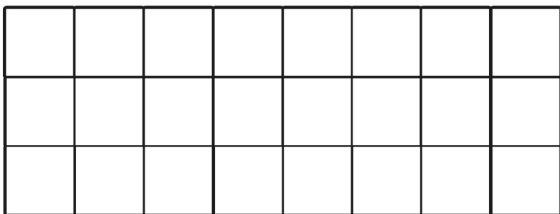
4. \_\_\_\_\_



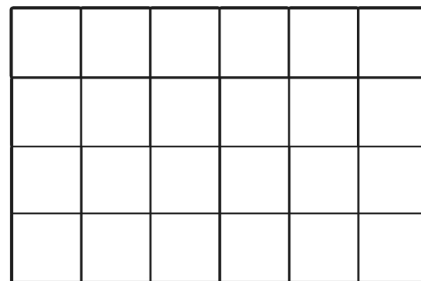
5. \_\_\_\_\_



6. \_\_\_\_\_



7. \_\_\_\_\_



8. \_\_\_\_\_

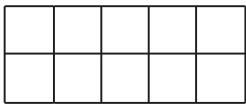
The unshaded squares show  $\frac{3}{4}$ . Write the equivalent fractions:

Date \_\_\_\_\_

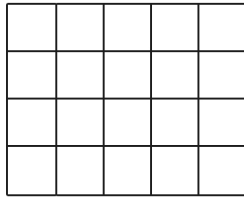
Name \_\_\_\_\_

# Equivalent Fractions $\frac{1}{10}$

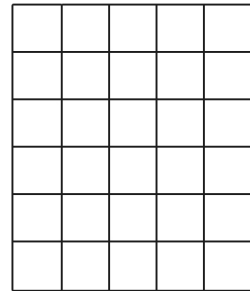
Shade  $\frac{1}{10}$  of each shape. Look at how many squares are shaded (numerator) and the total amount of squares (denominator) and write the equivalent fraction underneath.



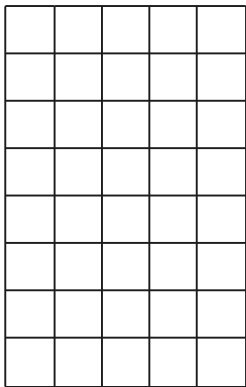
1. \_\_\_\_\_




2. \_\_\_\_\_




3. \_\_\_\_\_




4. \_\_\_\_\_




5. \_\_\_\_\_



6. \_\_\_\_\_



7. \_\_\_\_\_



8. \_\_\_\_\_


The unshaded squares show  $\frac{9}{10}$ . Write the equivalent fractions:

Date \_\_\_\_\_


Name \_\_\_\_\_

# Equivalent Fractions $\frac{1}{100}$


Shade  $\frac{1}{100}$  of each shape. Look at how many squares are shaded (numerator) and the total amount of squares (denominator) and write the equivalent fraction underneath.



1. \_\_\_\_\_



2. \_\_\_\_\_



3. \_\_\_\_\_

The unshaded squares show  $\frac{99}{100}$ . Write the equivalent fractions: